
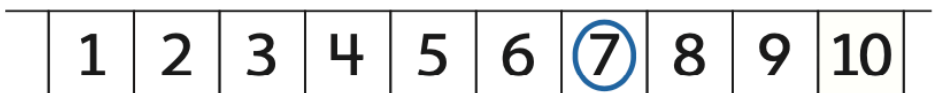


- 2 Why can the arrows point in both directions?

Apply It

- 3 Indy has 7 orange slices. She eats 5.
How many does she have left?

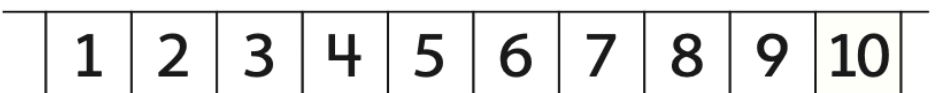


$7 - 5 = \underline{\quad}$

$5 + \underline{\quad} = 7$

She has slices left.

- 4 There are 9 cats. 4 are black. The rest are orange.
How many are orange?



$9 = 4 + \underline{\quad}$

$9 - \underline{\quad} = \underline{\quad}$

 cats are orange.